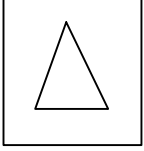


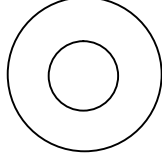


Test-17

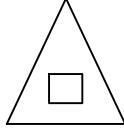
5.



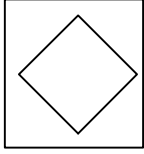
1. Şekil



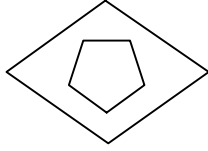
2. Şekil



3. Şekil



4. Şekil



5. Şekil


Yukarıda verilen şekillerden iki tanesi benzer özelliklere sahiptir.

Buna göre benzer özelliklere sahip olan şekiller aşağıdakilerden hangisinde doğru olarak verilmiştir?

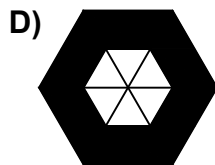

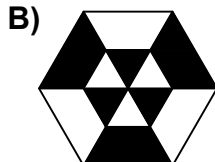

- A) 1 ve 2
C) 2 ve 4

- B) 1 ve 5
D) 3 ve 2


6.



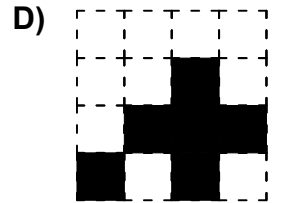
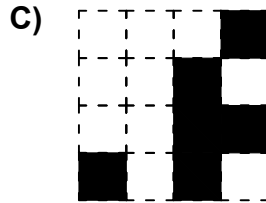

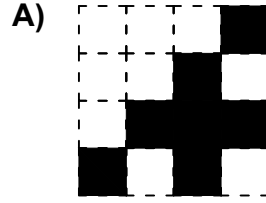
Yukarıdaki şeklin negatifi aşağıdaki şekillerden hangisinde verilmiştir ?



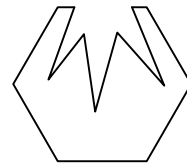
7.



Aşağıdaki şekillerden handisi yukarıda verilen şekil ile aynıdır ?



8.



Yukarıdaki şekil aşağıdaki şekillerden hangisi ile birleşirse bir altıgen oluşur ?

