



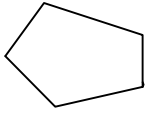
Test-24

1.

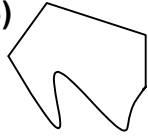


Yukarıdaki şekil aşağıdaki şekillerden hangisi ile birleşirse bir beşgen oluşur ?

A)



B)



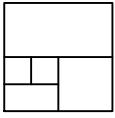
C)



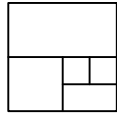
D)



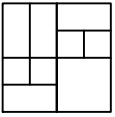
2.



1. Şekil



2. Şekil



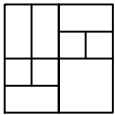
3. Şekil



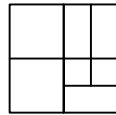
?

1. şekil ve 2. şekil arasında bir ilişki bulunmaktadır.
Benzer ilişki 3. şekil ile hangisi arasında vardır

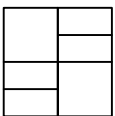
A)



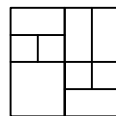
B)




C)



D)




3.




Aşağıdaki şekillerden hangisi yukarıda verilen şekil ile aynıdır ?


A)




B)



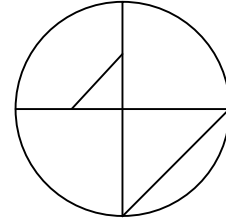
C)



D)



4.



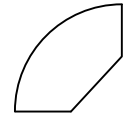
Yukarıdaki şekil bir çok küçük şeklin bir araya gelmesi ile oluşmuştur.

Aşağıdaki şekillerden hangisi yukarıdaki şekilde yoktur ?

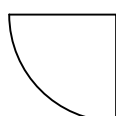
A)



B)



C)



D)

